



# Primary Geography Year 4 Assignment 03

<b>SUBJECT</b>	Primary Geography Year 4
<b>ASSIGNMENT</b>	03
<b>STUDENT NAME</b>	

## INSTRUCTIONS:

Complete all of the tasks in Parts A-E. You will need your Student Atlas to complete Part E.

**Write directly on the paper using a dark pen.**

## PART A: Plans & Scale

1. A plan shows an area from above, but reduced in size – it has been scaled down. The plan of a room is drawn to the scale 1:50 (for every 1cm on the paper it will be 50cm in real life).

How big will these pieces of furniture be in real life (in cm)?

- a. A bed which is drawn 2cm by 4cm?

\_\_\_\_\_ cm by \_\_\_\_\_ cm

- b. A rug which is drawn 1cm by 3cm?

\_\_\_\_\_ cm by \_\_\_\_\_ cm

- c. A sofa which is drawn 2cm by 1cm?

\_\_\_\_\_ cm by \_\_\_\_\_ cm

(3 marks)

2. Now let's imagine we are looking at a plan of a school, drawn to the scale 1:100 (1cm is equal to 1 metre/m in real life).

If the features are shown this size on the map, how big are they in real life (in cm/m)?



a. A desk drawn as 1cm by 1 cm?

\_\_\_\_\_m by \_\_\_\_\_m

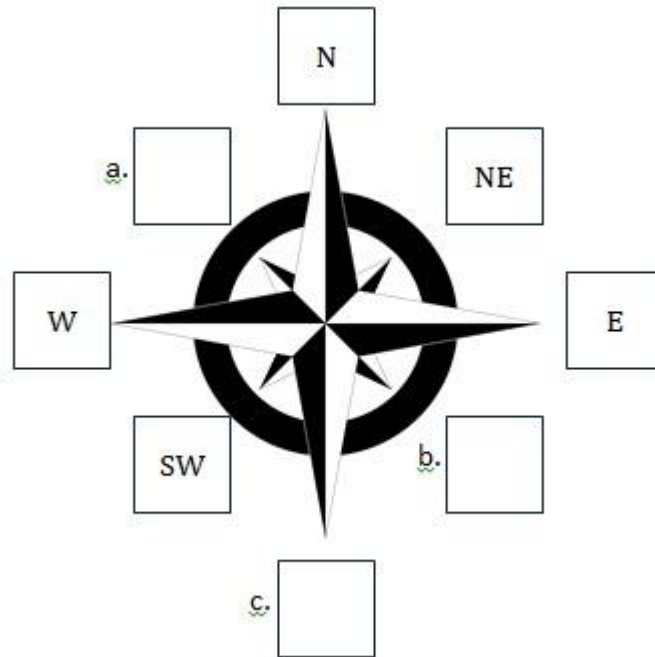
b. A whiteboard drawn as 0.5 cm by 2 cm?

\_\_\_\_\_cm by \_\_\_\_\_cm/m

(2 marks)

**PART B: Compass & Directions**

3. Complete the missing points on the compass below:



(3 marks)

**PART C: Symbols & OS Maps**

4. What do each of the following symbols represent?

a.  \_\_\_\_\_

b.  \_\_\_\_\_

c.  \_\_\_\_\_

(3 marks)

5. List two things that a good symbol needs to be.

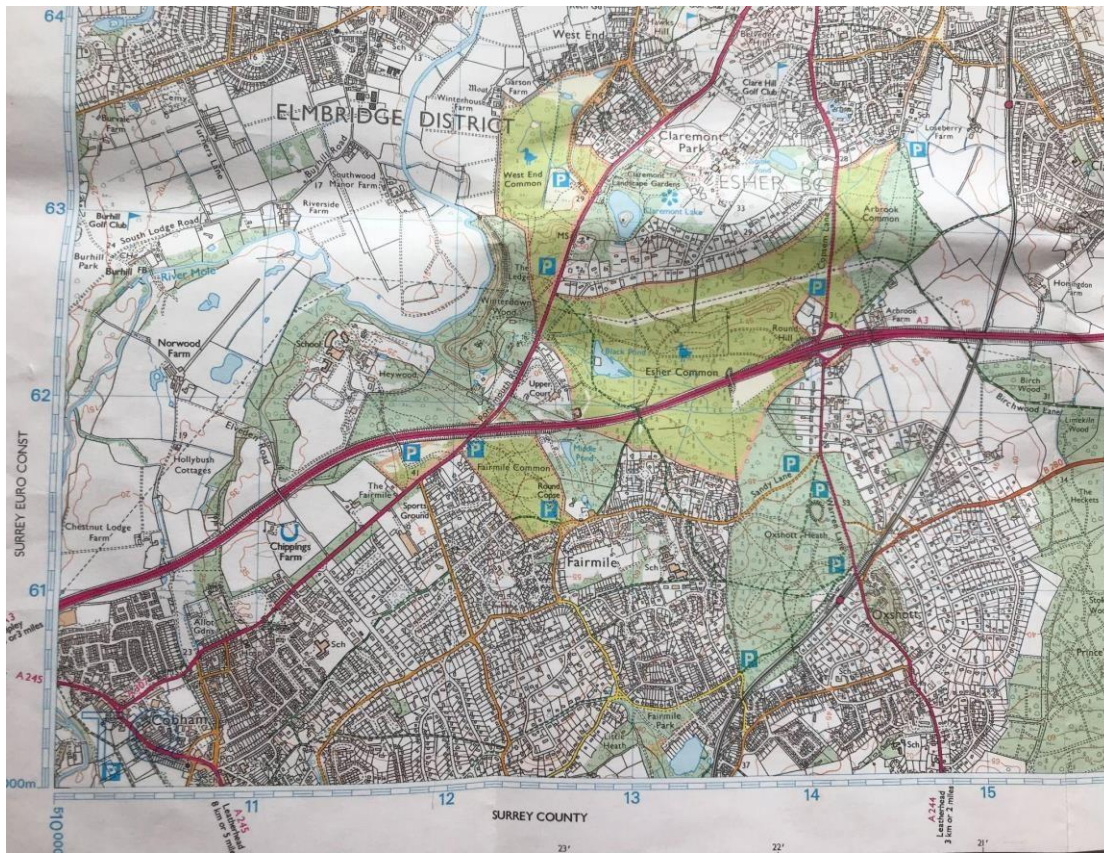
\_\_\_\_\_


\_\_\_\_\_

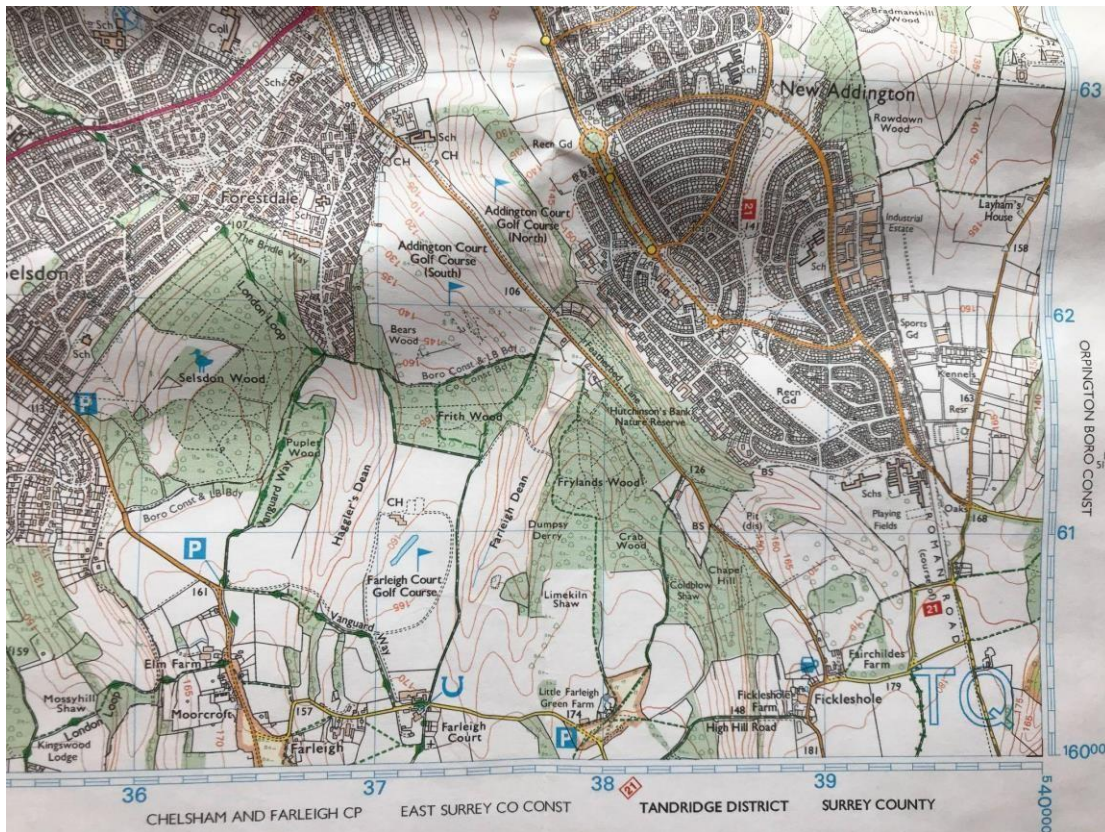
(2 marks)

---

**PART D: Grid References**



6. Give the 4-figure grid references of 2  :
1. \_\_\_\_\_
  2. \_\_\_\_\_
- (2 marks)
7. What is the name of the farm in square 1161?
- \_\_\_\_\_
- (1 mark)
8. Which building can be located in square 1162?:
- \_\_\_\_\_
- (1 mark)



9. What is the 6-figure grid reference of the nature reserve?

\_\_\_\_\_

(1 mark)

10. What is the 6-figure grid reference of where you can horse ride?

\_\_\_\_\_

(1 mark)

**PART E: Atlases**

11. What are the page number and grid references for the following places?

a. Tagus River: \_\_\_\_\_

b. Islamabad: \_\_\_\_\_

(2 marks)



10. Use your atlas to find the capital cities of these countries:

a. Argentina: \_\_\_\_\_

b. Greenland: \_\_\_\_\_

c. Bhutan: \_\_\_\_\_

(3 marks)

**TOTAL FOR ASSIGNMENT 24 MARKS**

