

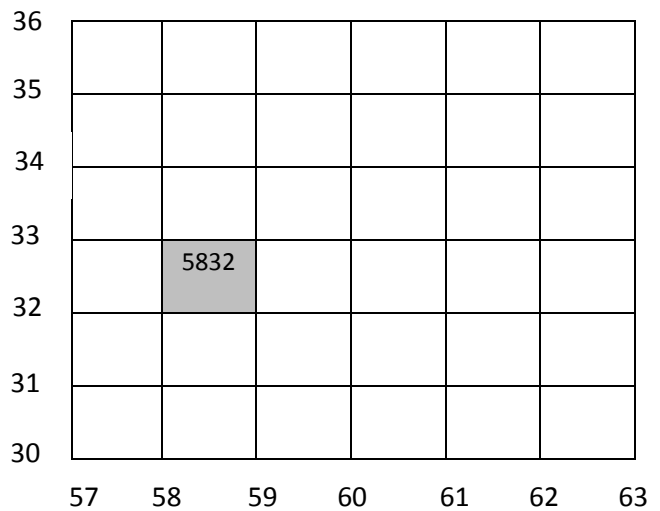
## 4-Figure and 6-Figure Grid References

There are two main types of grid references:

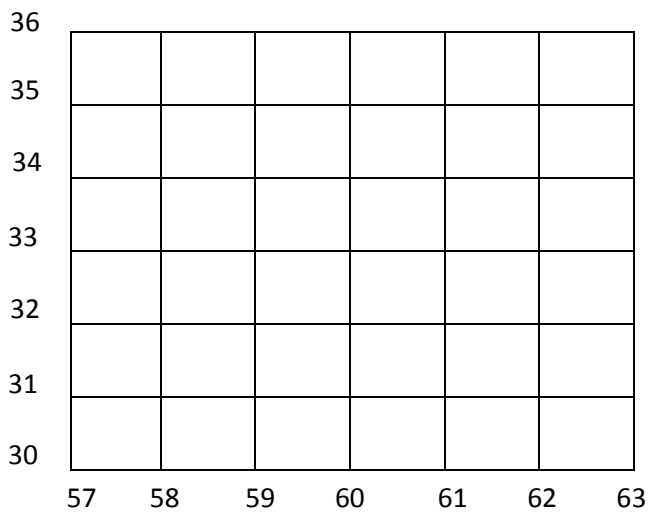
- **Four-Figure** – This indicates a single km square on an OS map
- **Six-Figure** – This indicates a point within a square

To find these grid-references you must read along the corridor and then up the stairs.

This gives you the bottom left corner of the grid square/point you're trying to find.



**Task 1:** Add the letters in the correct place on the grid below:



A – 5833

B – 6131

C – 5730

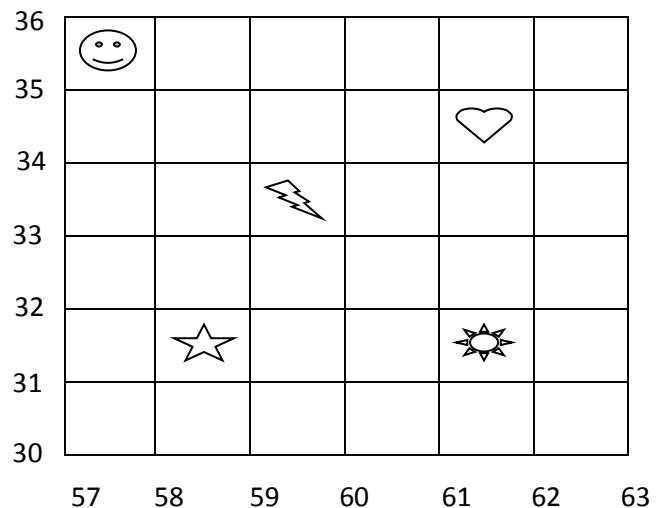
D – 5931

E – 6132








**Task 2:** Write the four-figure grid references

for the squares labelled below:

- \_\_\_\_\_ ☺
- \_\_\_\_\_ ♥
- \_\_\_\_\_ ⚡
- \_\_\_\_\_ ☀
- \_\_\_\_\_ ☆



Write down the six-figure grid reference for the points below and add the correct shapes to their points:

62											 634625
9											 637622
8											 630628
7											 _____
6											 _____
5											
4											
3											
2											
1											
62											
63	1	2	3	4	5	6	7	8	9		