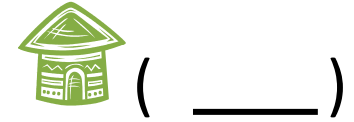
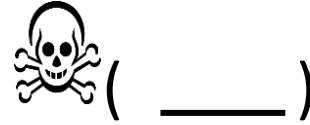
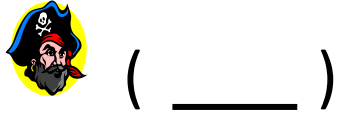
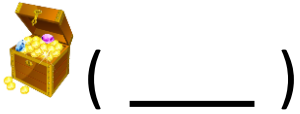


What are the coordinates for Treasure Island?



Put an X on the grave of 'Blind Pete' (H6) – Plant a flag (O5) – Where is the pirate ship? (_____)

