



# Primary Maths Year 2 Assignment 12

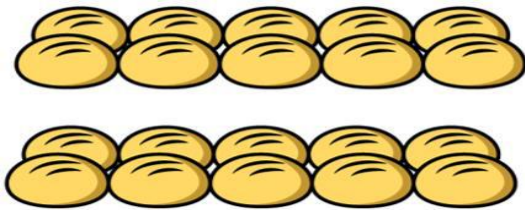
<b>SUBJECT</b>	Primary Maths Year 2
<b>ASSIGNMENT</b>	12
<b>STUDENT NAME</b>	

## TASK:

This assignment has 8 questions to answer.

- Write the number sentence or draw your working in the space provided.
- Write your answer in the box at the bottom of the working out space.
  - **Complete and submit the assignment to your child's tutor during Step 36 Lesson 5.**

1. Sam has these bread rolls to sell.



He sells 14 of them. How many does he have left?

Answer

(2 marks)





2. Emma has 3 tins of paint.



Each tin contains 5 litres of paint. Emma uses 7 litres of paint.

How many litres of paint does Emma have left?


Answer

(3 marks)





3. Lily has 20 apples.



She packs the apples into bags of 4.

How many bags does she need?

Answer

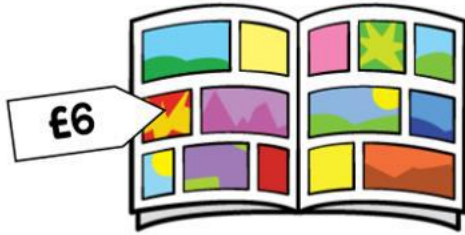
(2 marks)





4. Gemma has £20.

She buys 2 of these magazines.



How much money does Gemma have left?

Answer

(3 marks)





5. Max has four number cards.

25	35	45	55
----	----	----	----

He uses them to make two calculations.

$$\begin{array}{r} \square + \square = 70 \\ \square - \square = 20 \end{array}$$


Work out where the numbers should go and write them in the boxes.

(2 marks)





6. Mr Jones shares these pens between 2 classes.



How many pens does each class get?


Answer

(2 marks)





7. Rosie has 42 sweets in total.



How many sweets are in the bag?


Answer

(2 marks)





8. Fred sells stamps.



On Monday he sold 25 stamps.

On Tuesday he sold 15 more.

How many stamps did he sell altogether?

Answer

(2 marks)

**TOTAL FOR ASSIGNMENT 18 MARKS**

