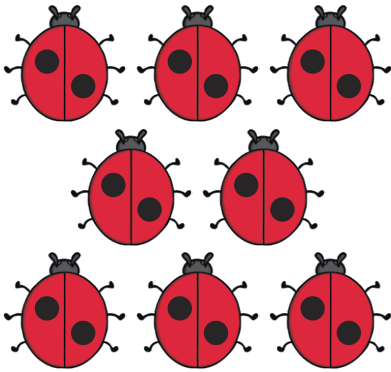


2 Times Tables

Multiplication Word Problems

Write the number sentence on the line and the answer in the box below.


Here are 8 ladybirds.
Each one has 2 spots.
How many spots do they have altogether?




10 pizzas were cut in half. How many pieces are there?




Jo read 2 books every day. How many books did Jo read in 7 days?



There are 2 pencils in each pack. How many pencils are there in 11 packs?



Here are 9 pairs of cherries. How many cherries are there in total?




Sam saved £2 for 12 weeks. How much money did he save?

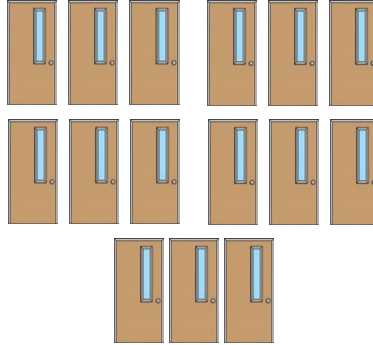


Write the number sentence on the first line and the answer below.

Gary scores 5 points in each game. How many points does he score in 9 games?



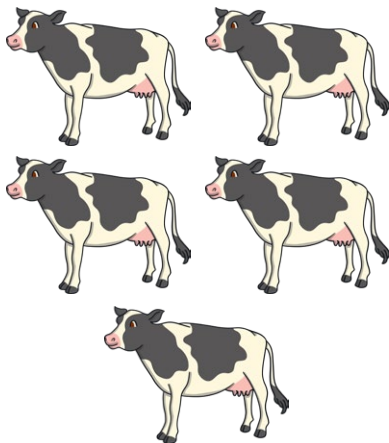
A block of flats has 5 floors with 3 doors on each. How many doors altogether?




Sal saves £5 pocket money a week. How much money does she save over 12 weeks?



How many legs have 5 cows?



The teacher gave 2 children 5 sweets each. How many sweets did she give away?



5 pupils have 10 pencils each. How many pencils have they all together?

