


Stationery problems


Help the office find $\frac{1}{4}$ of these amounts.




$$\frac{1}{4} \text{ of } \boxed{} = \boxed{}$$



$$\frac{1}{4} \text{ of } \boxed{} = \boxed{}$$



$$\frac{1}{4} \text{ of } \boxed{} = \boxed{}$$



$$\frac{1}{4} \text{ of } \boxed{} = \boxed{}$$



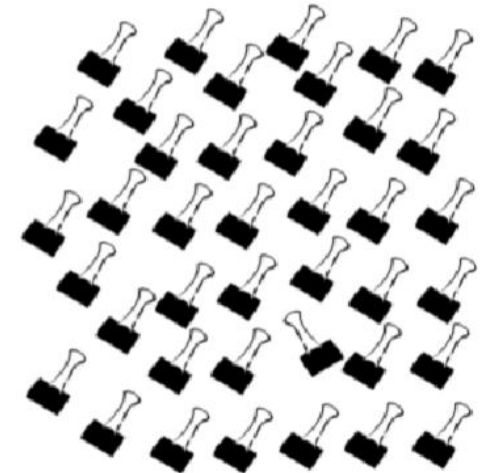
$$\frac{1}{4} \text{ of } \boxed{} = \boxed{}$$



$$\frac{1}{4} \text{ of } \boxed{} = \boxed{}$$



$$\frac{1}{4} \text{ of } \boxed{} = \boxed{}$$



$$\frac{1}{4} \text{ of } \boxed{} = \boxed{}$$